

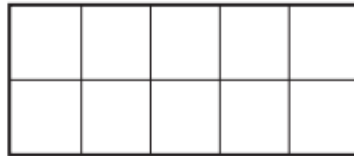
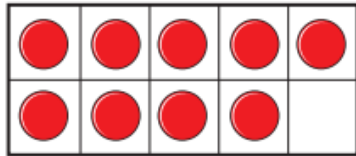
**Learning Objective:**

To add numbers to 20 by counting on.

- 1 There are 9 children on the bus.  
5 more children get on the bus.

How many children are on the bus now?

Complete the ten frames and the sentences.

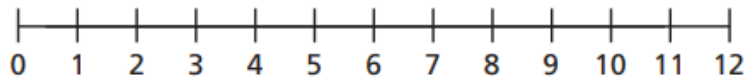


$$\square + \square = \square$$

- 2 Eva has 4 coins.

Jack gives her 7 more coins.

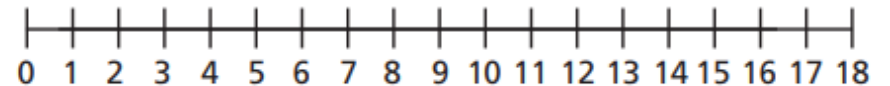
How many coins does Eva have now?



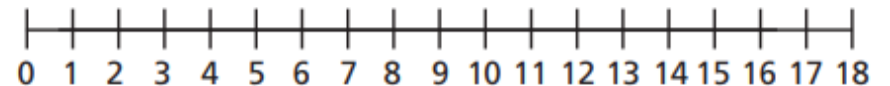
$$\square + \square = \square$$

- 3 Use the number lines to work out the additions.

a)  $2 + 13 = \square$



b)  $4 + 9 = \square$



c)  $1 + 17 = \square$

