

Tuesday 19th January 2021



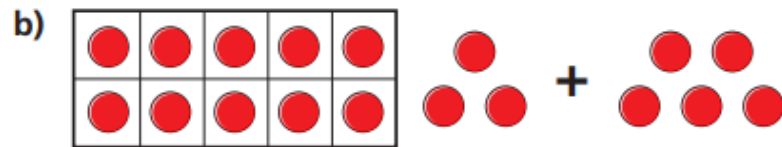
Learning Objective:

To add numbers to 20 by using number bonds.

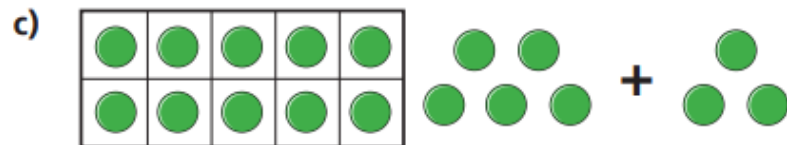
1 Complete the additions.



$$3 + 5 = \square$$

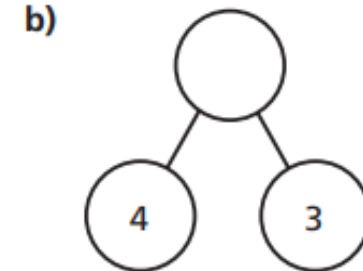
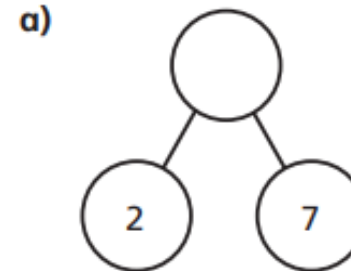


$$13 + 5 = \square$$



$$15 + 3 = \square$$

2 Complete the part-whole models.



3 Complete the additions.

a) $12 + 7 = \square$

b) $13 + 4 = \square$

$$17 + 2 = \square$$

$$14 + 3 = \square$$

$$7 + 12 = \square$$

$$4 + 13 = \square$$

$$2 + 17 = \square$$

$$3 + 14 = \square$$