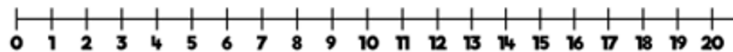


Friday Challenge Sheet


How many ways can you complete this number sentence? Write them in your home learning book.

Use the number line to help you.



$$\square - \square = 11$$

Amir has 16 apples. Ron has none.
Amir gives Ron 9 apples.
Who has the most apples now?
Explain how you know.



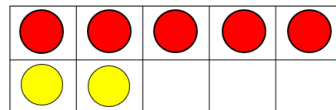
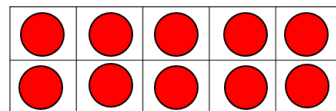
Circle the addition and subtraction number sentences that match the ten frames.

$15 + 3 = 18 \quad 15 - 3 = 18$

$3 + 18 = 15 \quad 18 - 15 = 3$

$18 + 3 = 15 \quad 18 - 3 = 15$

$18 = 3 + 15 \quad 15 - 18 = 3$



Whitney has 16 sweets and eats 7 of them.

Mo has 17 sweets and eats 8 of them.



Who has more sweets left?

Explain how you know.